

Year 2 Maths

Miss Stokes' Group

Summer term 2 Week 3

Counting and writing numbers up to 50



Challenge 1

Can you count forwards from 1 up to 50 and fill in the missing numbers?

1 ____ 3 ____ 5 ____ 7 ____ 9 ____ 11
____ 13 ____ 15 ____ 17 ____ 19 ____

21 ____ 23 ____ 25 ____ 27 ____ 29
____ 31 ____ 33 ____ 35 ____ 37

38 ____ 40 ____ 42 ____ 44 ____ 46
____ 48 ____ 50

Challenge 2

Can you count backwards from 50 to 1 and fill in the missing numbers?

50 ____ 48 ____ 46 ____ 44 ____ 42
____ 40 ____ 38

____ 36 ____ 34 ____ 32 ____ 30
____ 28 ____ 26 ____ 24 ____ 22

21 ____ 19 ____ 17 ____ 15 ____ 13
____ 11 ____ 9 ____ 7 ____ 5 ____ 3
____ 1

Challenge 3

Can you find one more than a given number up to 50?

One more than 34 is ____

One more than 40 is ____

One more than 27 is ____

One more than 45 is ____

Can you find one more than a given number up to 50?

One less than 22 is ____

One less than 38 is ____

One less than 50 is ____

One less than 46 is ____

Year 2 Maths

Miss Stokes' Group

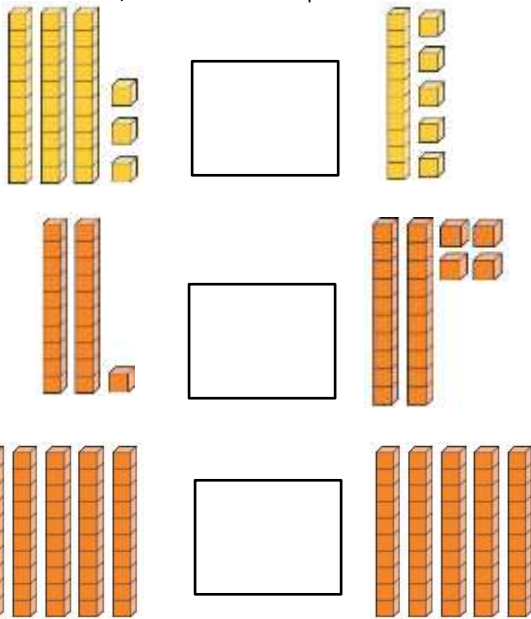
Summer term 2 Week 4

Compare numbers up to 50 using inequality symbols.



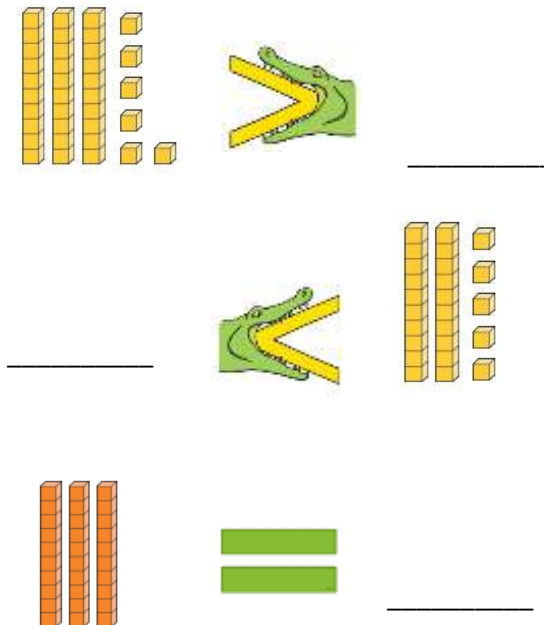
Challenge 1

Can you use inequality symbols ($<$ $=$ $>$) to compare these numbers in pictorial representations up to 50?



Challenge 2

Can you think of the missing number to make the number sentence correct?



Challenge 3

Can you compare these numbers in numerals using inequality symbols? ($>$ $=$ $<$)

33 _____ 40

29 _____ 36

25 _____ 25

48 _____ 39

36 _____ 50

Year 2 Maths

Miss Stokes' Group

Summer term 2 Week 5

Identify and name 2D shapes



Challenge 1

Colour in the circle shapes



Colour in the square shapes



Colour in the triangle shapes



Challenge 2

Guess the shape

I am thinking of a shape...

It has 3 straight sides

What shape am I thinking of?

I am thinking of a shape...

It has 8 straight sides

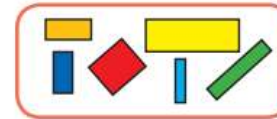
What shape am I thinking of?

Challenge 3


Match group of shapes to the labels



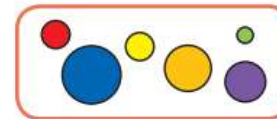
Squares



Circles



Triangles



Rectangles

Year 2 Maths

Miss Stokes' Group

Summer term 2 Week 6

Miss Stokes' shop

chocolate chips

cherries

jam

marshmallows



2p

5p

3p

10p

Challenge 1

Looking at what you can buy in Miss Stokes' shop.

If I wanted to buy the chocolate chips which coin would I need?



Circle the coin I need.

If I wanted to buy the marshmallows which coin would I need?



Circle the coin I need.

Challenge 2

Looking at what you can buy in Miss Stokes' shop.

Zack has 15p. He buys 3 jars of jam. How much money does Zack have left?

Linda has 5p and she wants to buy some marshmallows, does she have enough money?

Yes or no and why.

Challenge 3

Can you write the amount of each coin?



1p 2p 5p 10p 20p 50p £1 £2