

Year 3 Blue group

Maths Home Learning

Websites

<https://home.oxfordowl.co.uk/maths/>

<https://play.numbots.com/>

<https://www.topmarks.co.uk/>

<https://www.bbc.co.uk/bitesize/>










1	2	3	4
5	6	7	8
9	10	11	12
13	14	15	16
17	18	19	20

Ask someone to say a number and you have to write it down.

Then swap!

Monday

Count the number of each item and write the number in the circle.

	<input type="text" value="6"/>
	<input type="text"/>
	<input type="text"/>
	<input type="text"/>
	<input type="text"/>
	<input type="text"/>
	<input type="text"/>
	<input type="text"/>
	<input type="text"/>

Starter:

Can you count to 20?

<https://www.youtube.com/watch?v=OVLxWIHRD4E>

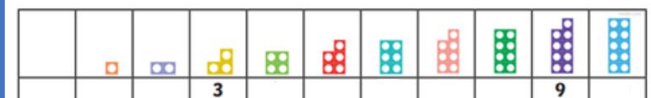
Can you write your numbers to 10?

Number formation



0	1	2	3	4	5
6	7	8	9	10	

Can you complete this number track?



Year 3 Blue group

Maths Home Learning

Websites

<https://home.oxfordowl.co.uk/maths/>

<https://play.numbots.com/>

<https://www.topmarks.co.uk/>

<https://www.bbc.co.uk/bitesize/>

1	2	3	4
5	6	7	8
9	10	11	12
13	14	15	16
17	18	19	20

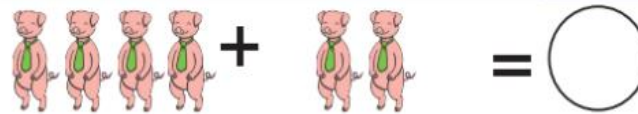
Ask someone to say a number and you have to write it down.

Then swap!

Tuesday

Count the objects and write the number underneath before adding the objects together and writing the total in the circle.

 + = (2)

 + = ()

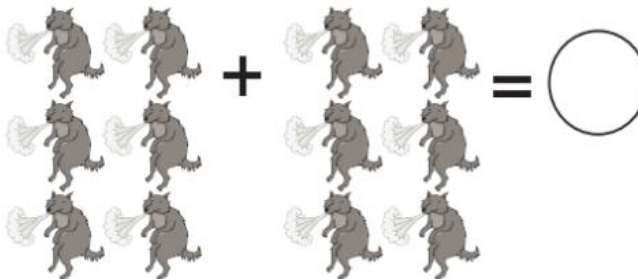
 + = ()

 + = ()

 + = ()

 + = ()

 + = ()

 + = ()


Starter:

Can you count to 20?

<https://www.youtube.com/watch?v=OVLxWIHRD4E>

Can you write your numbers to 10?

Number formation



Can you complete this number track?



Year 3 Blue group

Maths Home Learning

Websites

<https://home.oxfordowl.co.uk/maths/>

<https://play.numbots.com/>

<https://www.topmarks.co.uk/>

<https://www.bbc.co.uk/bitesize/>



1	2	3	4
5	6	7	8
9	10	11	12
13	14	15	16
17	18	19	20

Ask someone to say a number and you have to write it down.

Then swap!

Wednesday

Look at the straw house and the pig - can you compare the different sizes and sort them out in order from smallest to biggest? Cut each house and pig out and stick them in order of size.



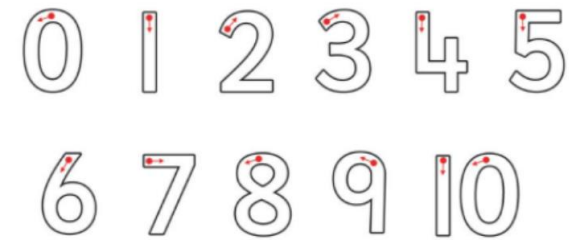
Starter:

Can you count to 20?

<https://www.youtube.com/watch?v=OVLxWIHRD4E>

Can you write your numbers to 10?

Number formation



Can you complete this number track?



Year 3 Blue group

Maths Home Learning

Websites

<https://home.oxfordowl.co.uk/maths/>

<https://play.numbots.com/>

<https://www.topmarks.co.uk/>

<https://www.bbc.co.uk/bitesize/>


1	2	3	4
5	6	7	8
9	10	11	12
13	14	15	16
17	18	19	20

Ask someone to say a number and you have to write it down.

Then swap!

Friday

Look at the number on each pig. Can you read the number? Cut the pigs out and put them in the correct order from 0-10.



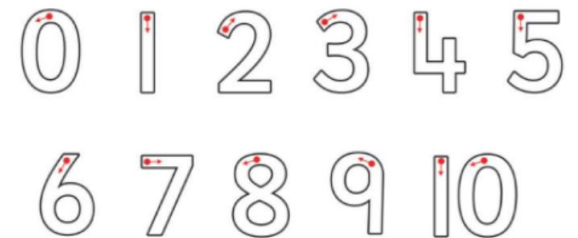
Starter:

Can you count to 20?

<https://www.youtube.com/watch?v=OVLxWIHRD4E>

Can you write your numbers to 10? Then, draw the correct symbol in the middle box to show which is greater. Remember – the crocodile always wants to eat the bigger number.

Number formation



Can you complete this number track?

